

Name _____

Happy Very Hungry Caterpillar Day!

The very hungry caterpillar ate through...



___pple




___atermelon



___ear



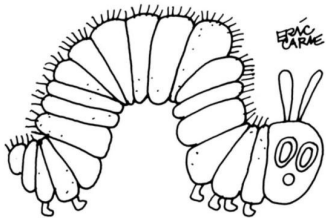
___eaf



___trawberry

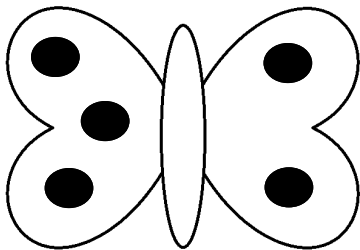


___ake

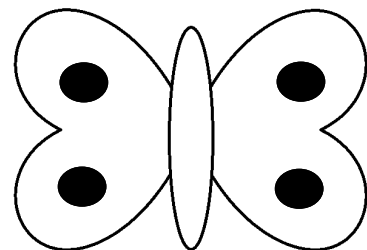


Butterfly Addition

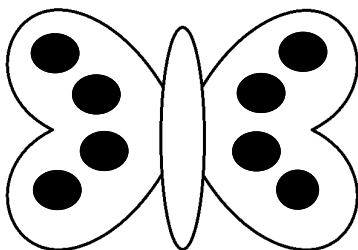
Find the sum of the dots on both of the wings, then write the addition sentence.



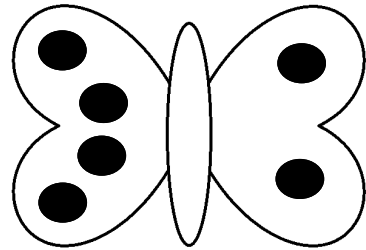
$$\underline{\quad} + \underline{\quad} = \underline{\quad}$$



$$\underline{\quad} + \underline{\quad} = \underline{\quad}$$



$$\underline{\quad} + \underline{\quad} = \underline{\quad}$$



$$\underline{\quad} + \underline{\quad} = \underline{\quad}$$